

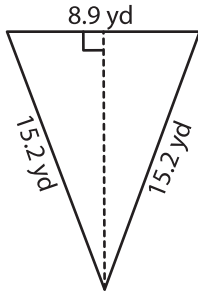
Name : _____

T2S4

Area of an Isosceles Triangle

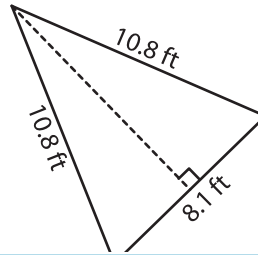
Find the area of each isosceles triangle. Round your answer to two decimal places.

1)



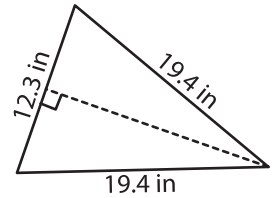
Area = _____

2)

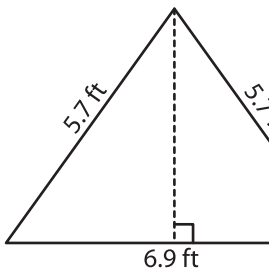


Area = _____

3)



4)



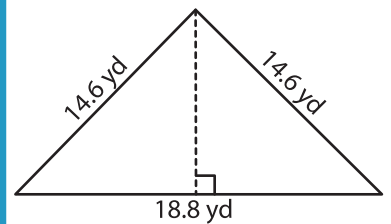
Area = _____

PREVIEW
Gain complete access to the largest collection of worksheets in all subjects!

Members, please log in to download this worksheet.

Not a member? Please sign up to gain complete access.

www.mathworksheets4kids.com



Area = _____

7) The length of each of the equal sides measures 7.5 feet.

Find the area, if the base measures 10 feet.

8) The base of an isosceles triangle measures 19.7 yards. Determine the area of the isosceles triangle, if the two equal sides measure 15.8 yards each.