

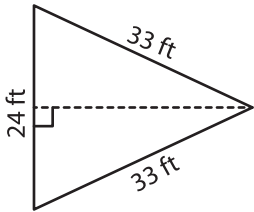
Name : _____

Area of an Isosceles Triangle

T2S2

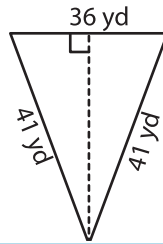
Find the area of each isosceles triangle. Round your answer to two decimal places.

1)



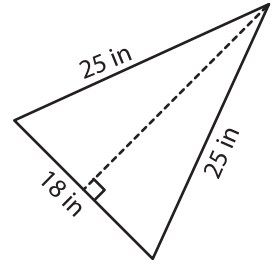
Area = _____

2)

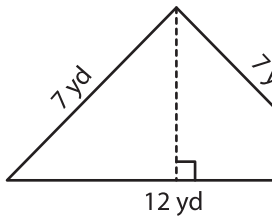


Area = _____

3)



4)



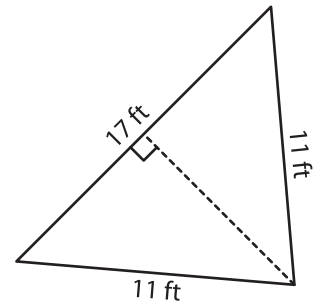
Area = _____

PREVIEW
Gain complete access to the largest collection of worksheets in all subjects!

Members, please log in to download this worksheet.

Not a member? Please sign up to gain complete access.

www.mathworksheets4kids.com



Area = _____

7) The length of each of the equal sides is 13 feet. The length of the base measures 22 feet.

Determine the area, if the

8) An isosceles triangle has two equal sides of length 32 inches each. If the length of the base is 26 inches, find the area of the isosceles triangle.