

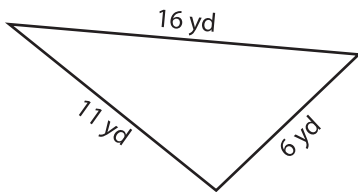
Name : _____

Area of a Scalene Triangle

T2S1

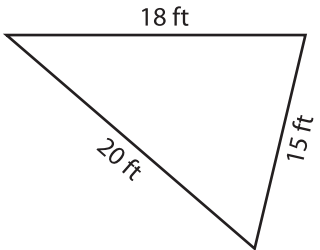
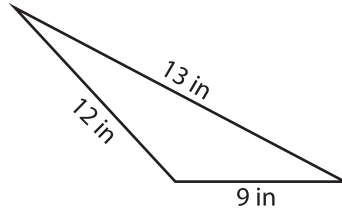
A) Find the area of each scalene triangle. Round your answer to two decimal places.

1)



Area = _____

2)



Area = _____

B) Find the area of each scalene triangle. Round your answer to two decimal places.

4) $a = 14$ in, $b = 12$ in, $c = 10$ in

Area = _____

6) $a = 4$ ft, $b = 8$ ft, $c = 11$ ft

Area = _____

8) What is the area of the scalene triangle with sides 10 yards and 16 yards?

9) The sides of a scalene triangle measure 18 feet, 14 feet and 19 feet. Find the area.

PREVIEW

Gain complete access to the largest collection of worksheets in all subjects!

Members, please log in to download this worksheet.

Not a member? Please sign up to gain complete access.

www.mathworksheets4kids.com