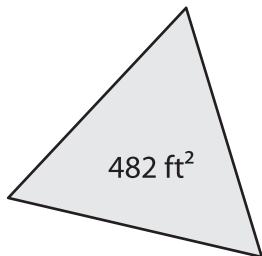


Name : _____

Equilateral Triangle - Finding Side Length

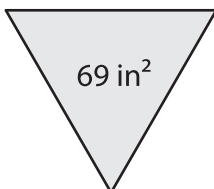
A) Find the side length of each equilateral triangle. Round your answer to the nearest tenth.

1)



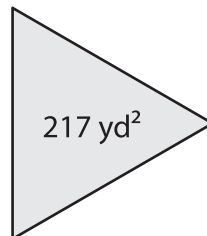
Side Length = _____

2)



Side Length = _____

3)



Side Length = _____

B) Find the side length of each equilateral triangle. Round your answer to the nearest tenth.

4) Area = 76 in²

Side Length = _____

6) Area = 528 ft²

Side Length = _____

8) If an equilateral triangle has an area of 100 square feet, find the side length of the triangle.

9) Determine the side length of the triangle, if area of an equilateral triangle is 245 square yards.

PREVIEW

Gain complete access to the largest collection of worksheets in all subjects!

Members, please log in to download this worksheet.

Not a member? Please sign up to gain complete access.

www.mathworksheets4kids.com