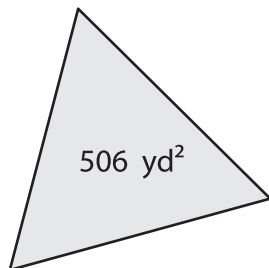


Name : _____

Equilateral Triangle - Finding Side Length

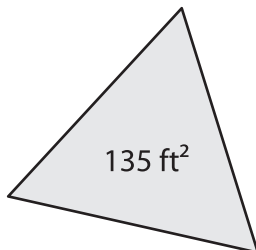
A) Find the side length of each equilateral triangle. Round your answer to the nearest tenth.

1)



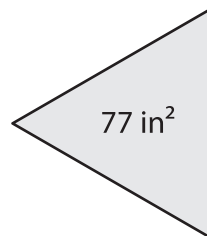
Side Length = _____

2)



Side Length = _____

3)



Side Length = _____

B) Find the side length of each equilateral triangle. Round your answer to the nearest tenth.

4) Area = 234 yd^2

Side Length = _____

6) Area = 319 in^2

Side Length = _____

8) The area of an equilateral triangle is 100 cm^2 . Find the side length of the triangle.

9) What is the side length of the triangle, if the area of an equilateral triangle is 423 square feet ?

PREVIEW

Gain complete access to the largest collection of worksheets in all subjects!

Members, please log in to download this worksheet.

Not a member? Please sign up to gain complete access.

www.mathworksheets4kids.com