

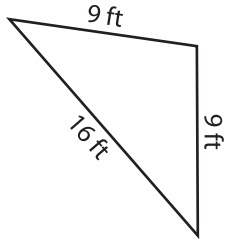
Name : \_\_\_\_\_

## Identifying Triangles

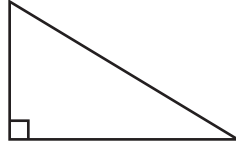
Angles & Sides: S4

Identify each triangle based on both angles and sides.

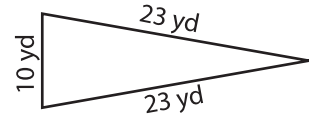
1)



2)

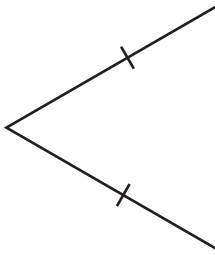


3)



Obtuse isosceles triangle

4)



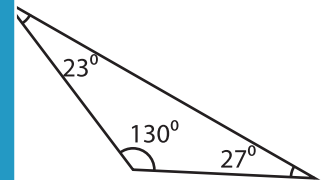
# PREVIEW

Gain complete access to the largest collection of worksheets in all subjects!

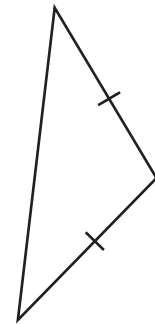
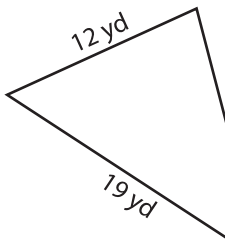
Members, please log in to download this worksheet.

Not a member? Please sign up to gain complete access.

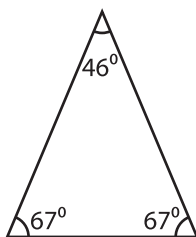
[www.mathworksheets4kids.com](http://www.mathworksheets4kids.com)



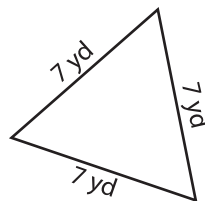
7)



10)



11)



12)

