

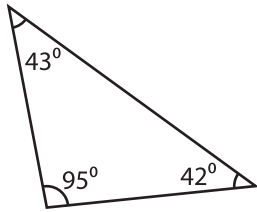
Name : _____

Identifying Triangles

Angles or Sides: S3

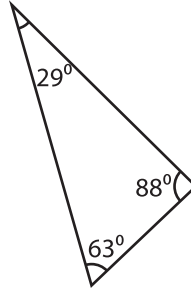
Identify each triangle based on angles or sides.

1)

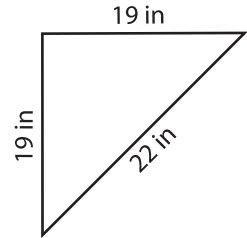


Obtuse triangle

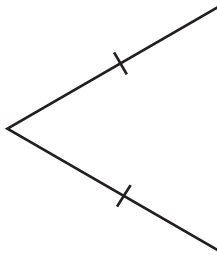
2)



3)

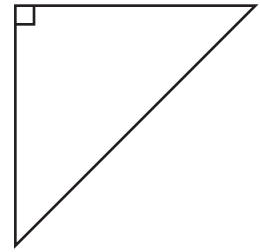


4)

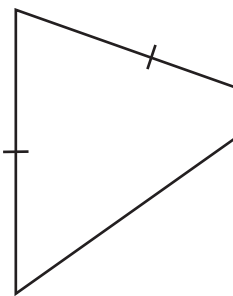


PREVIEW

Gain complete access to the largest collection of worksheets in all subjects!



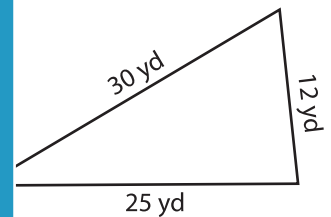
7)



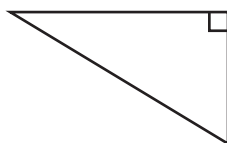
Members, please log in to download this worksheet.

Not a member? Please sign up to gain complete access.

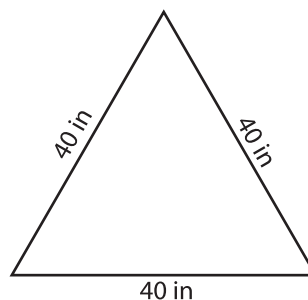
www.mathworksheets4kids.com



10)



11)



12)

