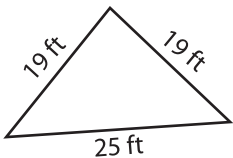
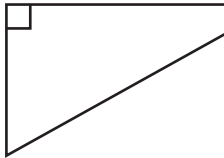
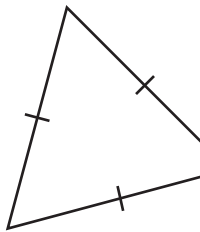
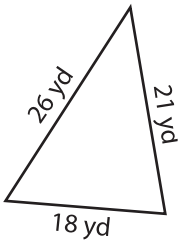
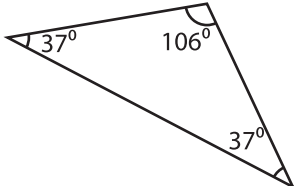


Name : \_\_\_\_\_

# Classifying Triangles

Tick the boxes that apply to each triangle.

| Triangle  | Equilateral | Isosceles | Scalene | Acute | Obtuse | Right |
|---|-------------|-----------|---------|-------|--------|-------|
| 1)<br>   |             |           |         |       |        |       |
| 2)<br>  |             |           |         |       |        |       |
| 3)<br> |             |           |         |       |        |       |
| 4)<br> |             |           |         |       |        |       |
| 5)<br> |             |           |         |       |        |       |

## PREVIEW

Gain complete access to the largest collection of worksheets in all subjects!

Members, please log in to download this worksheet.

Not a member? Please sign up to gain complete access.

[www.mathworksheets4kids.com](http://www.mathworksheets4kids.com)