

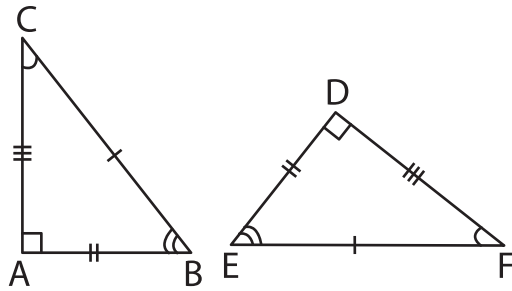
Name : \_\_\_\_\_

# Congruence Statements

Sheet 1

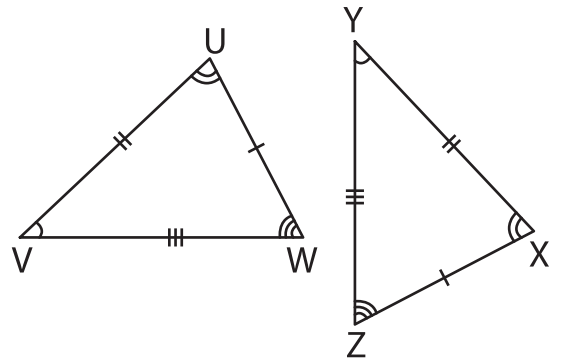
Complete the congruence statement for each pair of triangles.

1)



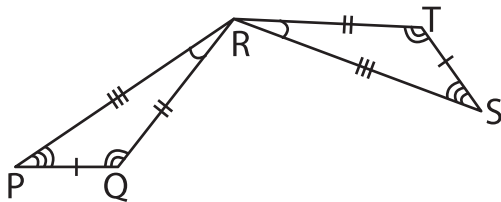
$\triangle ABC \cong$  \_\_\_\_\_

2)



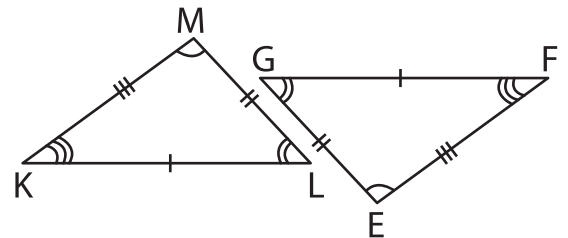
$\triangle UVW \cong$  \_\_\_\_\_

3)



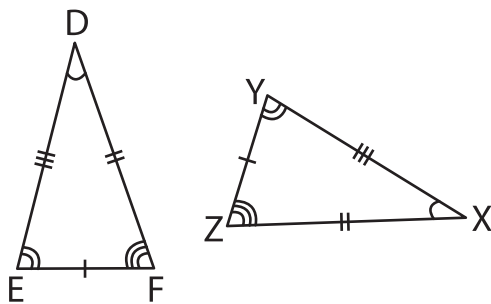
$\triangle PQR \cong$  \_\_\_\_\_

4)



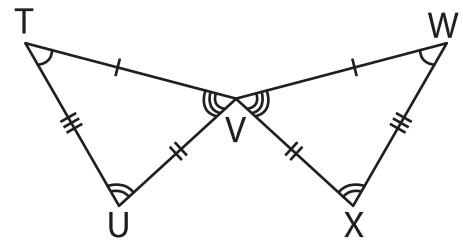
$\triangle KLM \cong$  \_\_\_\_\_

5)



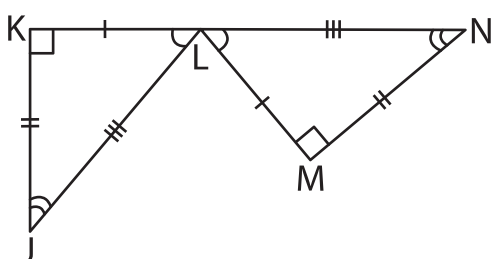
$\triangle DEF \cong$  \_\_\_\_\_

6)



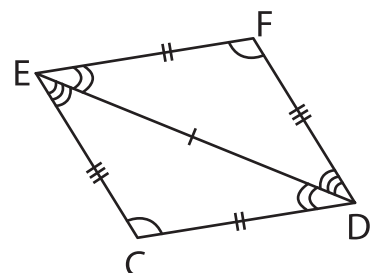
$\triangle TUV \cong$  \_\_\_\_\_

7)



$\triangle JKL \cong$  \_\_\_\_\_

8)



$\triangle CDE \cong$  \_\_\_\_\_