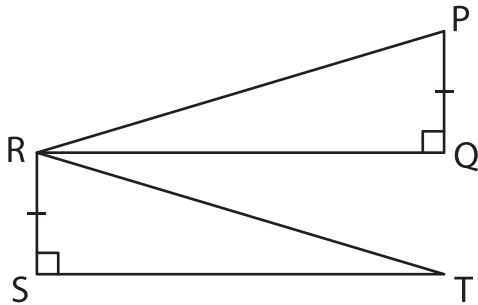


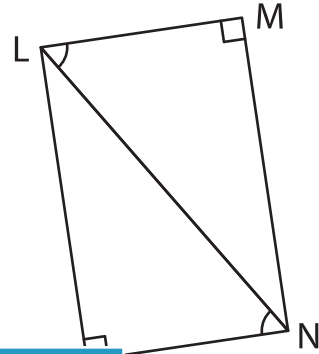
Congruent Triangles

State the congruence required to prove the congruence of right triangles using the indicated postulate.

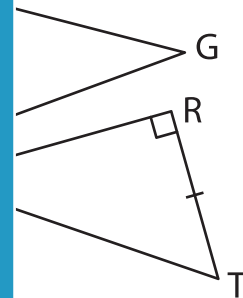
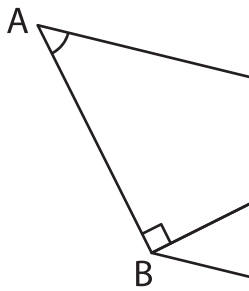
1) HL



2) LA



3) HA



PREVIEW

Gain complete access to the largest collection of worksheets in all subjects!

Members, please log in to download this worksheet.

Not a member? Please sign up to gain complete access.

www.mathworksheets4kids.com

5) LA

