

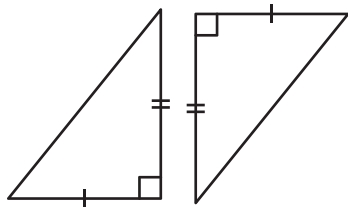
Name : \_\_\_\_\_

## Congruent Triangles

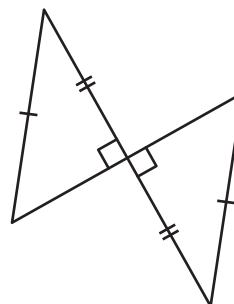
Sheet 2

State the postulate to prove each pair of right triangles is congruent.


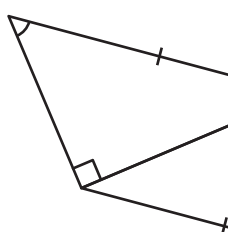
1)



2)



3)



**PREVIEW**

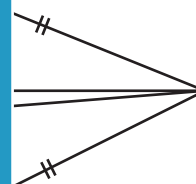
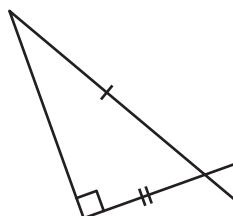
Gain complete access to the largest collection of worksheets in all subjects!

Members, please log in to download this worksheet.

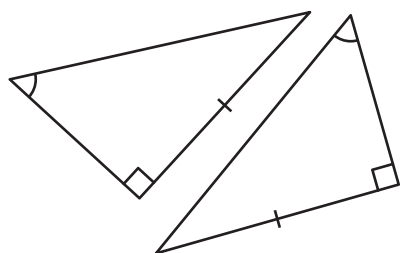
Not a member? Please sign up to gain complete access.

[www.mathworksheets4kids.com](http://www.mathworksheets4kids.com)

5)



7)



8)

