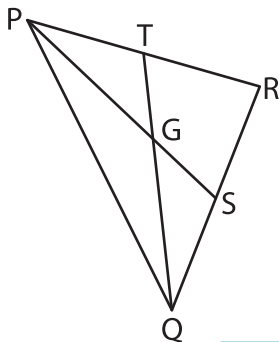
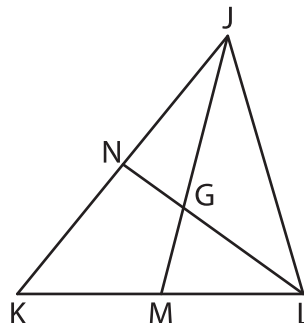


Median and Centroid

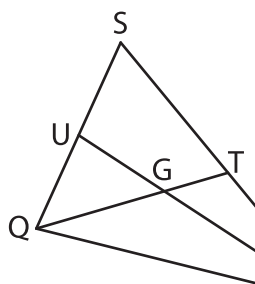
- 1) In $\triangle PQR$, \overline{PS} and \overline{QT} are medians. Find TG if $GQ = 17$ inches.



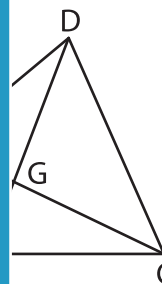
- 2) In $\triangle JKL$, \overline{JM} and \overline{LN} are medians. Determine LG if $GN = 1$ yard.



- 3) In $\triangle QRS$, \overline{QT} and \overline{RU} are medians. Find DF if $GT = 2$ feet.



are medians. Find DF if



PREVIEW

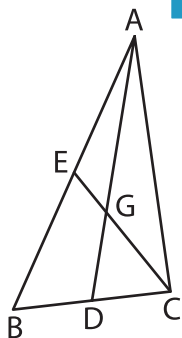
Gain complete access to the largest collection of worksheets in all subjects!

Members, please log in to download this worksheet.

Not a member? Please sign up to gain complete access.

www.mathworksheets4kids.com

- 5) In $\triangle ABC$, \overline{AD} and \overline{CE} are medians. Determine TV if $EG = 5$ yards and $UW = 39$ feet.



are medians. Determine TV if $EG = 5$ yards and $UW = 39$ feet.

