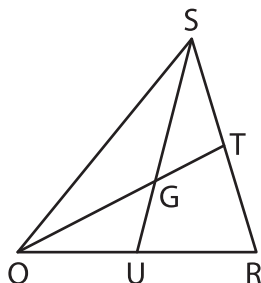
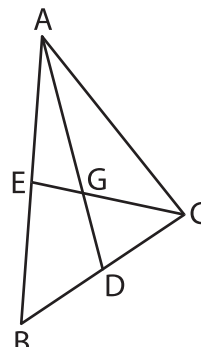


Median and Centroid

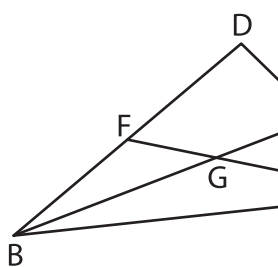
- 1) In $\triangle QRS$, \overline{QT} and \overline{SU} are medians. Determine GT if $QG = 5$ feet.



- 2) In $\triangle ABC$, \overline{AD} and \overline{CE} are medians. Find GD if $AD = 12$ inches.



- 3) In $\triangle BCD$, \overline{BE} and \overline{CF} are medians. Determine SV if $GE = 20$ yards.



are medians. Determine SV



PREVIEW

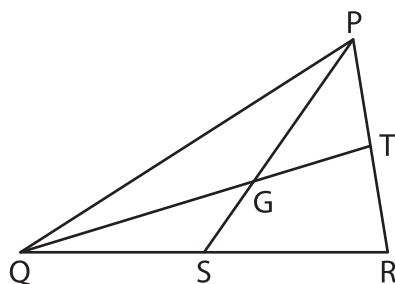
Gain complete access to the largest collection of worksheets in all subjects!

Members, please log in to download this worksheet.

Not a member? Please sign up to gain complete access.

www.mathworksheets4kids.com

- 5) In $\triangle PQR$, \overline{PS} and \overline{QT} are medians. Find GM and LN if $GS = 9$ inches.



are medians. Find GM and $LN = 15$ yards.

