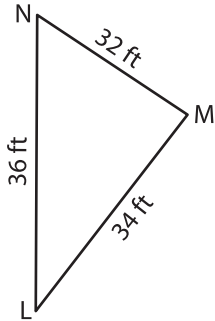


Triangle - Angle

A) Find the smallest and largest angle in each triangle.

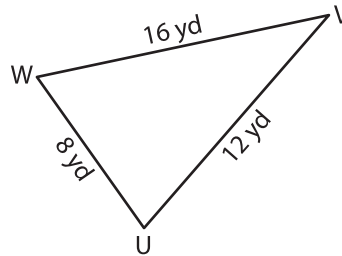
1)



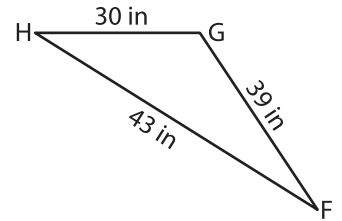
Smallest angle = _____

Largest angle = _____

2)



3)

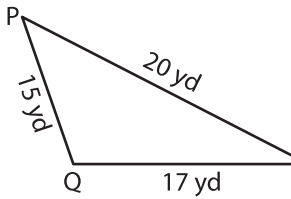


Smallest angle = _____

Largest angle = _____

B) Order the angles from smallest to largest.

1)



PREVIEW

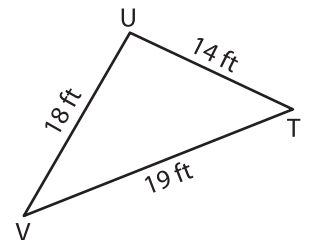
Gain complete access to the largest collection of worksheets in all subjects!

Members, please log in to download this worksheet.

Not a member? Please sign up to gain complete access.

www.mathworksheets4kids.com

angle.



C) Order the angles from smallest to largest.

1)

