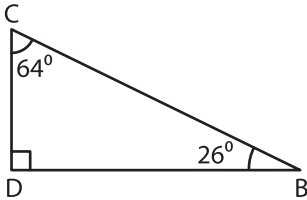


# Triangle - Side

A) Find the shortest and longest side in each triangle.

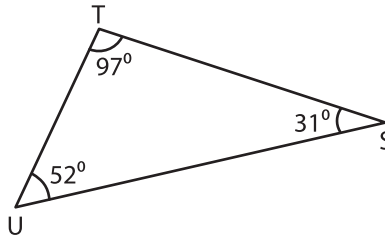
1)



Shortest side = \_\_\_\_\_

Longest side = \_\_\_\_\_

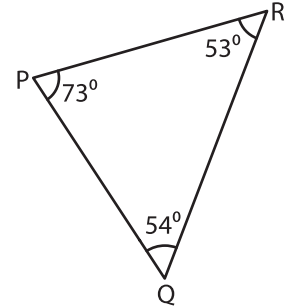
2)



Shortest side = \_\_\_\_\_

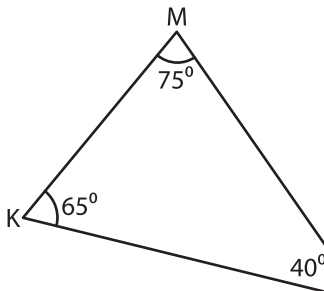
Longest side = \_\_\_\_\_

3)



B) Order the sides from \_\_\_\_\_

1)



\_\_\_\_\_

## PREVIEW

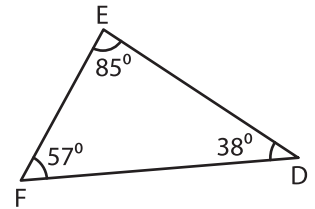
Gain complete access to the largest collection of worksheets in all subjects!

Members, please log in to download this worksheet.

Not a member? Please sign up to gain complete access.

[www.mathworksheets4kids.com](http://www.mathworksheets4kids.com)

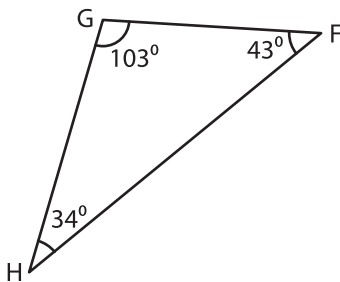
\_\_\_\_\_gle.



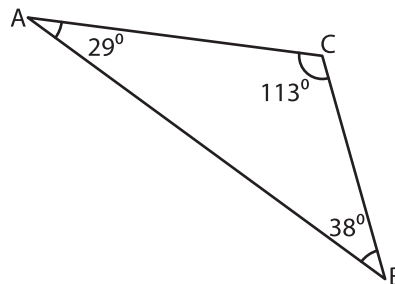
\_\_\_\_\_

C) Order the sides from \_\_\_\_\_

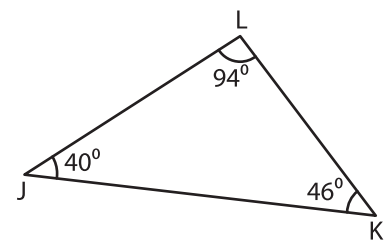
1)



\_\_\_\_\_



\_\_\_\_\_



\_\_\_\_\_