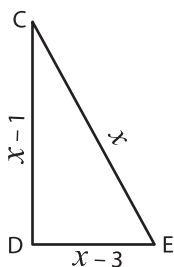


Missing Sides

Find the value of x and compute the length of the sides for each triangle.

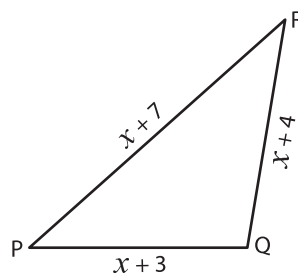
1)



Perimeter = 11 yd ; $x =$ _____ ;

CD = _____ ; DE = _____ ; CE = _____

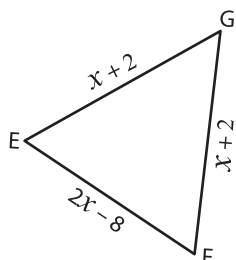
2)



Perimeter = 50 in ; $x =$ _____ ;

PQ = _____ ; QR = _____ ; PR = _____

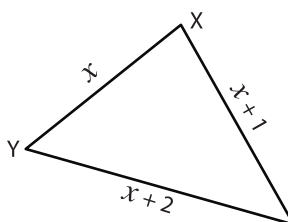
3)



Perimeter = 32 ft ; $x =$ _____

EF = _____ ; FG = _____

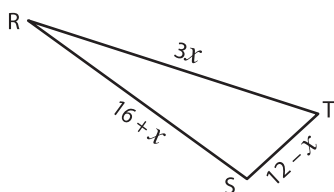
5)



Perimeter = 36 in ; $x =$ _____

YZ = _____ ; XZ = _____

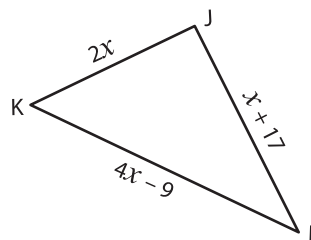
7)



Perimeter = 55 yd ; $x =$ _____ ;

RT = _____ ; RS = _____ ; ST = _____

8)



Perimeter = 78 in ; $x =$ _____ ;

JK = _____ ; KL = _____ ; JL = _____

PREVIEW

Gain complete access to the largest collection of worksheets in all subjects!

Members, please log in to download this worksheet.

Not a member? Please sign up to gain complete access.

www.mathworksheets4kids.com