

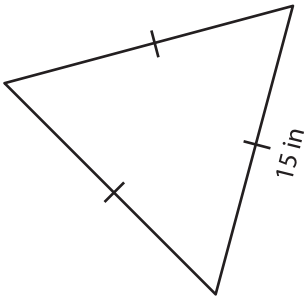
Name : \_\_\_\_\_

## Perimeter of a Triangle

Congruent sides: S4

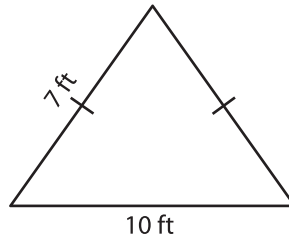
Find the perimeter of each triangle.

1)

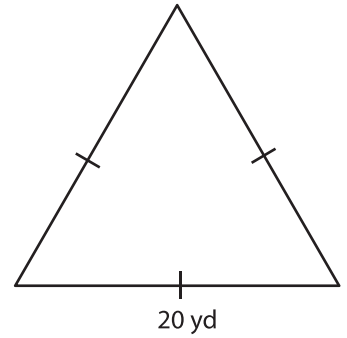


Perimeter = \_\_\_\_\_

2)

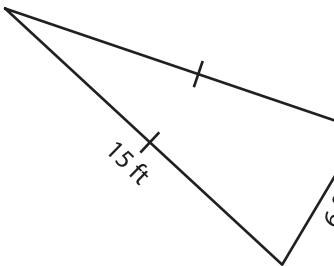


3)



Perimeter = \_\_\_\_\_

4)



Perimeter = \_\_\_\_\_

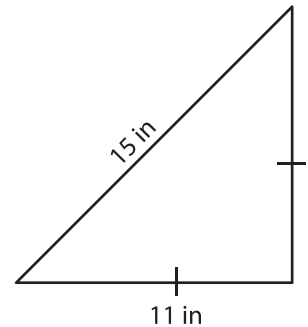
**PREVIEW**

Gain complete access to the largest collection of worksheets in all subjects!

Members, please log in to download this worksheet.

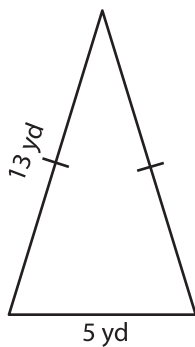
Not a member? Please sign up to gain complete access.

[www.mathworksheets4kids.com](http://www.mathworksheets4kids.com)

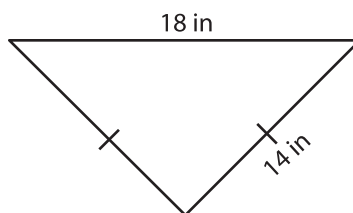


Perimeter = \_\_\_\_\_

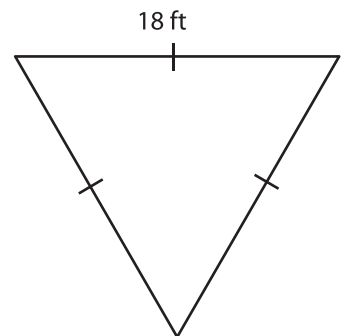
7)



Perimeter = \_\_\_\_\_



Perimeter = \_\_\_\_\_



Perimeter = \_\_\_\_\_