

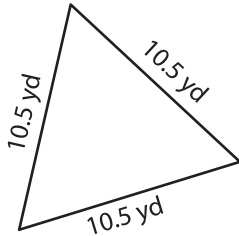
Name : \_\_\_\_\_

## Perimeter of a Triangle

T2S1

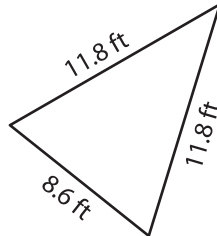
Find the perimeter of each triangle.

1)



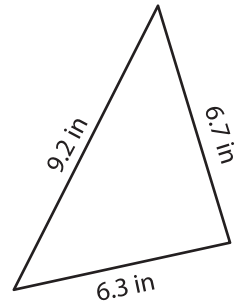
Perimeter = \_\_\_\_\_

2)

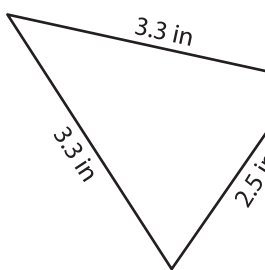


Perimeter = \_\_\_\_\_

3)



4)



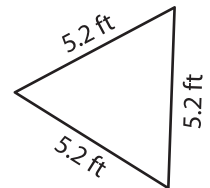
Perimeter = \_\_\_\_\_

**PREVIEW**  
Gain complete access to the largest  
collection of worksheets in all subjects!

Members, please  
log in to  
download this  
worksheet.

Not a member?  
Please sign up to  
gain complete  
access.

[www.mathworksheets4kids.com](http://www.mathworksheets4kids.com)



Perimeter = \_\_\_\_\_

7) Find the perimeter of the triangle with side lengths of 12.5 inches, 14.9 inches and 10.1 inches.

Perimeter = \_\_\_\_\_

8) The side lengths of a triangle are 2.8 yards, 6.6 yards and 7.4 yards. Determine its perimeter.