

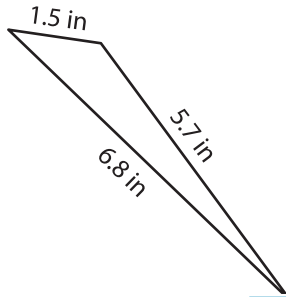
Name : _____

Perimeter of a Triangle

T2S2

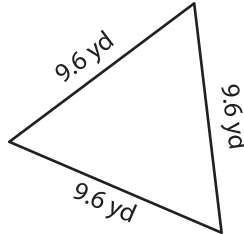
Find the perimeter of each triangle.

1)



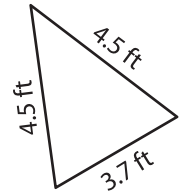
Perimeter = _____

2)

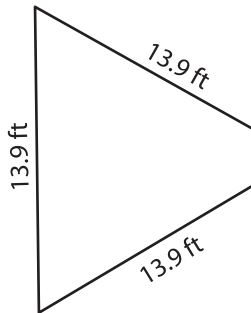


Perimeter = _____

3)



4)



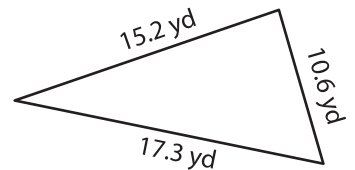
Perimeter = _____

PREVIEW
Gain complete access to the largest collection of worksheets in all subjects!

Members, please log in to download this worksheet.

Not a member? Please sign up to gain complete access.

www.mathworksheets4kids.com



Perimeter = _____

7) The side length of an equilateral triangle is 12.5 inches. Find the perimeter of the equilateral triangle.

8) An isosceles triangle has two equal sides of length 8.6 inches each. If the length of the base is 2.3 inches, find the perimeter of the isosceles triangle.
