

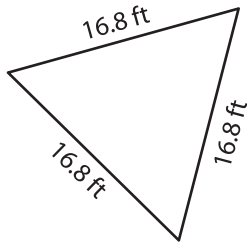
Name : _____

T2S5

Perimeter of a Triangle

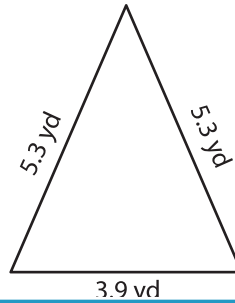
Find the perimeter of each triangle.

1)

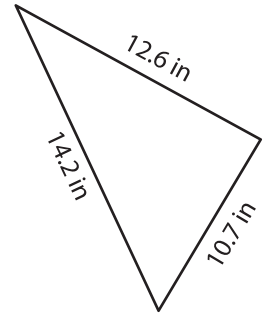


Perimeter = _____

2)

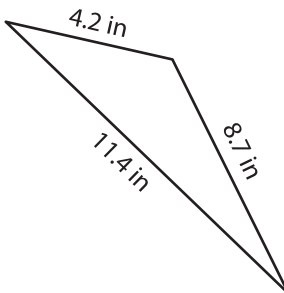


3)



Perimeter = _____

4)



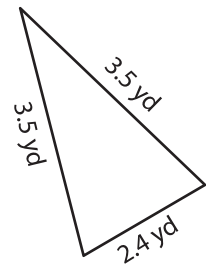
Perimeter = _____

PREVIEW
Gain complete access to the largest collection of worksheets in all subjects!

Members, please log in to download this worksheet.

Not a member? Please sign up to gain complete access.

www.mathworksheets4kids.com



Perimeter = _____

7) What is the perimeter of

and 9.5 feet?

8) The side lengths of a triangle are 17.9 yards, 20.5 yards and 21.8 yards. Determine its perimeter.
