

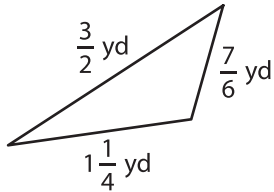
Name : _____

Perimeter of a Triangle

T2S2

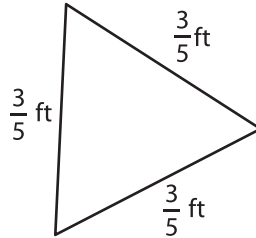
Find the perimeter of each triangle.

1)

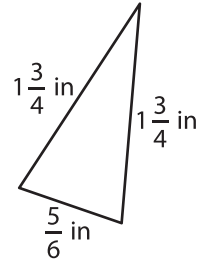


Perimeter =

2)

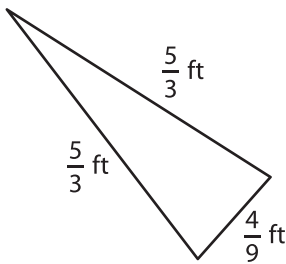


3)



Perimeter =

4)



Perimeter =

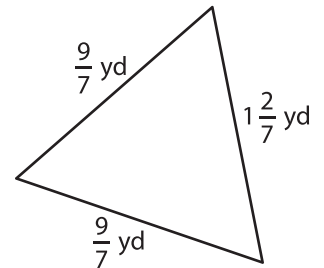
PREVIEW

Gain complete access to the largest collection of worksheets in all subjects!

Members, please log in to download this worksheet.

Not a member? Please sign up to gain complete access.

www.mathworksheets4kids.com



Perimeter =

7) What is the perimeter of

foot, $\frac{3}{4}$ foot and $1\frac{1}{6}$ feet?

8) The side lengths of a triangle are $\frac{5}{2}$ inches, $\frac{7}{3}$ inches and $\frac{1}{4}$ inch. Determine its perimeter.