

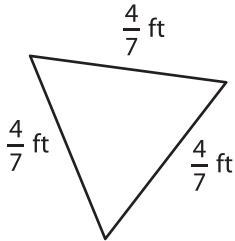
Name : _____

Perimeter of a Triangle

T2S3

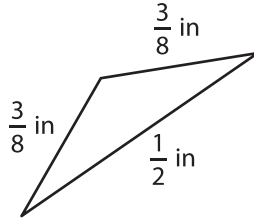
Find the perimeter of each triangle.

1)

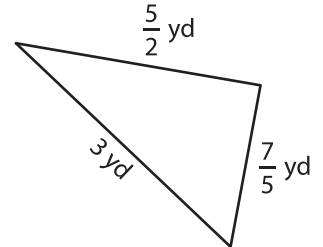


Perimeter =

2)

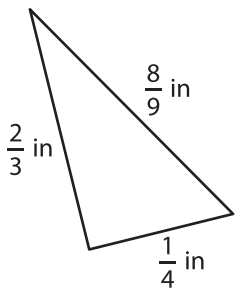


3)



Perimeter =

4)



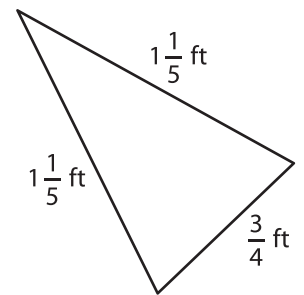
Perimeter =

PREVIEW
Gain complete access to the largest collection of worksheets in all subjects!

Members, please log in to download this worksheet.

Not a member? Please sign up to gain complete access.

www.mathworksheets4kids.com



Perimeter =

7) The side lengths of a triangle are $\frac{1}{2}$ in, $\frac{3}{4}$ in, and $\frac{1}{3}$ in. What is the perimeter?

Perimeter.

8) An isosceles triangle has two equal sides of length $\frac{5}{7}$ yard each. If the length of the base is $\frac{4}{3}$ yards, what is the perimeter of the isosceles triangle?