

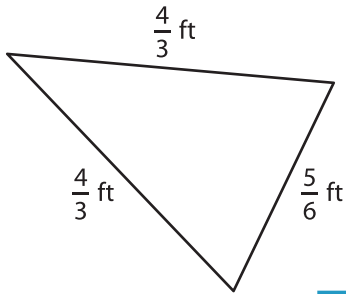
Name : _____

Perimeter of a Triangle

T2S5

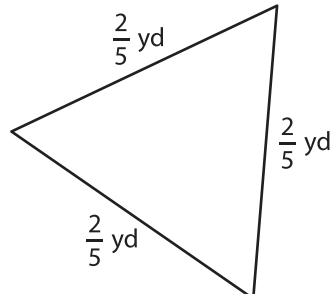
Find the perimeter of each triangle.

1)

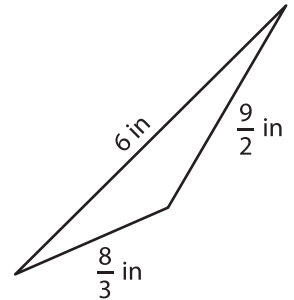


Perimeter =

2)

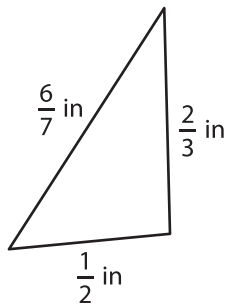


3)



Perimeter =

4)

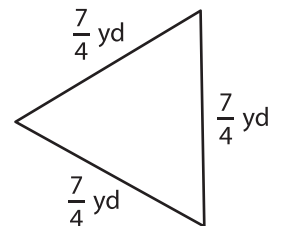


Perimeter =

PREVIEW
Gain complete access to the largest collection of worksheets in all subjects!

Members, please log in to download this worksheet.

Not a member? Please sign up to gain complete access.



Perimeter =

7) The base of an isosceles triangle is 10 cm. The two equal sides measure 12 cm each.

Find the perimeter of the isosceles triangle, if the

www.mathworksheets4kids.com

8) Find the perimeter of the triangle, if the side lengths of the triangle are $\frac{4}{5}$ yard, $1\frac{1}{8}$ yards and $\frac{6}{5}$ yards.