

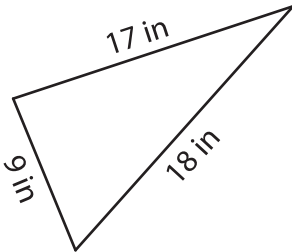
Name : _____

Perimeter of a Triangle

T2L1S1

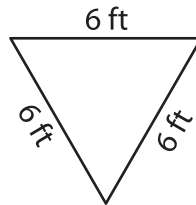
Find the perimeter of each triangle.

1)



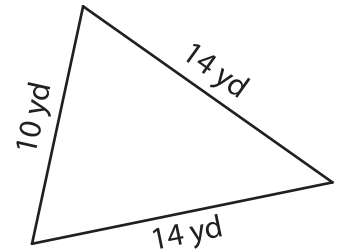
Perimeter = _____

2)

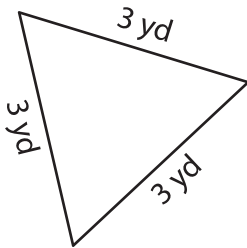


Perimeter = _____

3)



4)



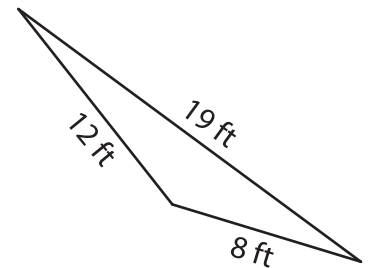
Perimeter = _____

PREVIEW
Gain complete access to the largest collection of worksheets in all subjects!

Members, please log in to download this worksheet.

Not a member? Please sign up to gain complete access.

www.mathworksheets4kids.com



Perimeter = _____

7) The base of an isosceles triangle is 10 yards. The two equal sides measure 12 yards each.

Find the perimeter of the isosceles triangle, if the

8) Find the perimeter of the triangle, if the side lengths of the triangle are 7 yards, 4 yards and 5 yards.
