

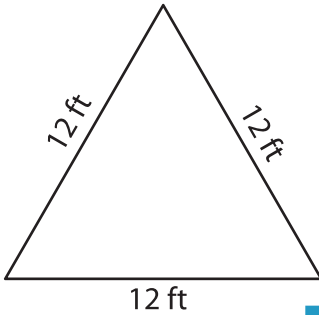
Name : \_\_\_\_\_

## Perimeter of a Triangle

T2L1S2

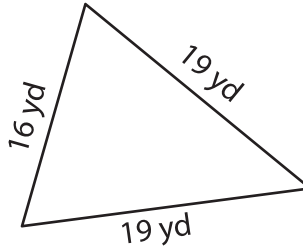
Find the perimeter of each triangle.

1)

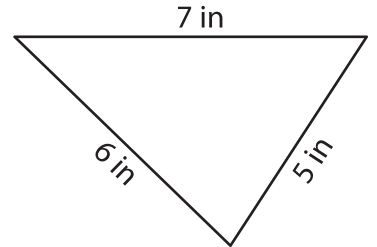


Perimeter = \_\_\_\_\_

2)

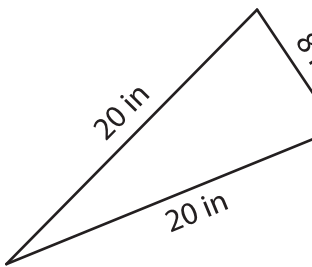


3)



Perimeter = \_\_\_\_\_

4)



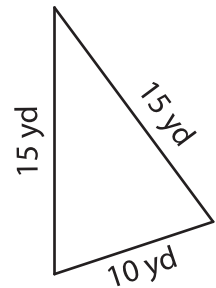
Perimeter = \_\_\_\_\_

**PREVIEW**  
Gain complete access to the largest collection of worksheets in all subjects!

Members, please log in to download this worksheet.

Not a member? Please sign up to gain complete access.

[www.mathworksheets4kids.com](http://www.mathworksheets4kids.com)



Perimeter = \_\_\_\_\_

7) Find the perimeter of the

and 19 yards.

8) The side length of an equilateral triangle is 17 inches. Determine the perimeter.