

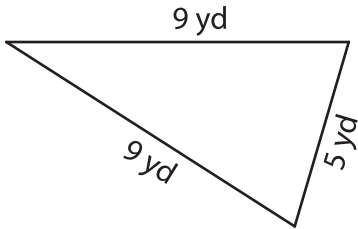
Name : _____

Perimeter of a Triangle

T2L1S3

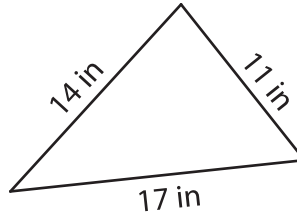
Find the perimeter of each triangle.

1)



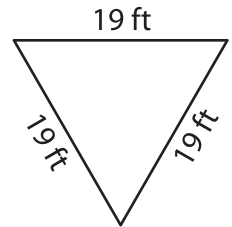
Perimeter = _____

2)

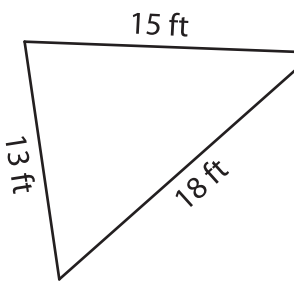


Perimeter = _____

3)



4)



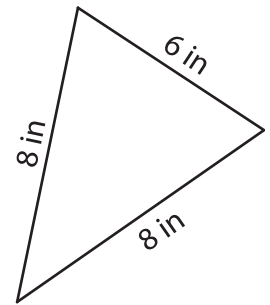
Perimeter = _____

PREVIEW
Gain complete access to the largest collection of worksheets in all subjects!

Members, please log in to download this worksheet.

Not a member? Please sign up to gain complete access.

www.mathworksheets4kids.com



Perimeter = _____

7) Determine the perimeter

nes.

8) The length of each of the two equal sides of an isosceles triangle is 12 feet. What is the perimeter, if the base measures 7 feet?