

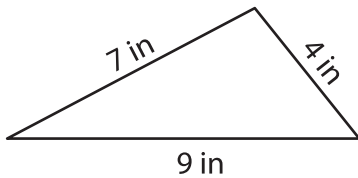
Name : _____

Perimeter of a Triangle

T2L1S4

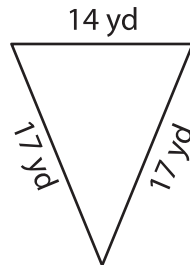
Find the perimeter of each triangle.

1)

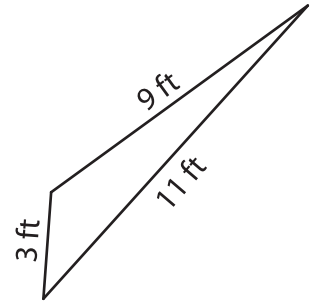


Perimeter = _____

2)

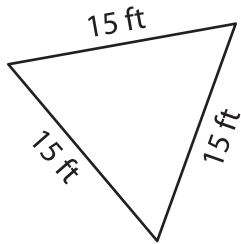


3)



Perimeter = _____

4)



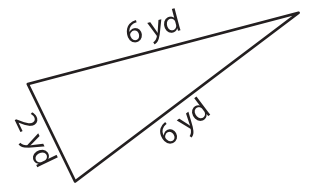
Perimeter = _____

PREVIEW
Gain complete access to the largest collection of worksheets in all subjects!

Members, please log in to download this worksheet.

Not a member? Please sign up to gain complete access.

www.mathworksheets4kids.com



Perimeter = _____

7) What is the perimeter of

d 12 feet?

8) The base of an isosceles triangle measures 18 inches. Determine the perimeter of the isosceles triangle, if the two equal sides measure 19 inches each.
