

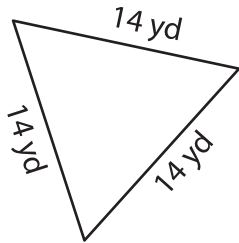
Name : _____

Perimeter of a Triangle

T2L1S5

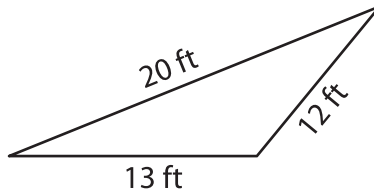
Find the perimeter of each triangle.

1)

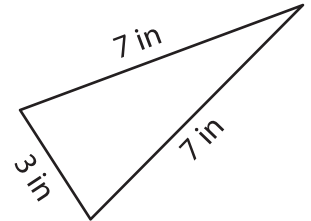


Perimeter = _____

2)

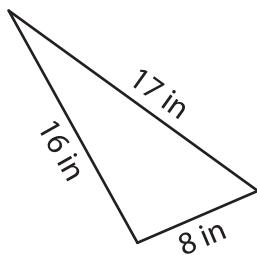


3)



Perimeter = _____

4)



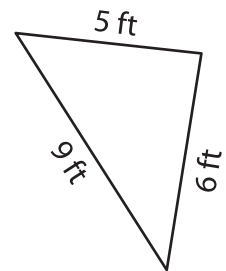
Perimeter = _____

PREVIEW
Gain complete access to the largest collection of worksheets in all subjects!

Members, please log in to download this worksheet.

Not a member? Please sign up to gain complete access.

www.mathworksheets4kids.com



Perimeter = _____

7) An isosceles triangle has two equal sides of 5 inches each. The length of the base is 10 inches, find the perimeter of the triangle.

Perimeter = _____

8) The side lengths of a triangle are 3 yards, 2 yards and 4 yards. What is the perimeter of the triangle?