

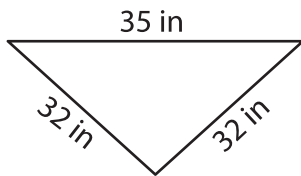
Name : _____

Perimeter of a Triangle

T2L2S1

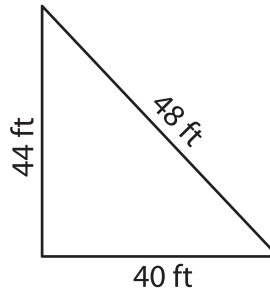
Find the perimeter of each triangle.

1)

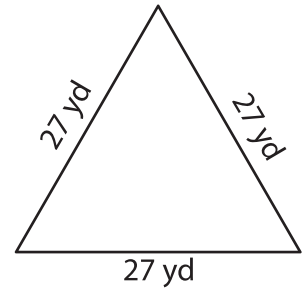


Perimeter = _____

2)

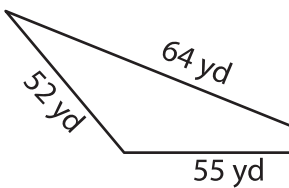


3)



Perimeter = _____

4)



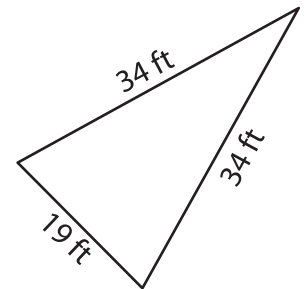
Perimeter = _____

PREVIEW
Gain complete access to the largest collection of worksheets in all subjects!

Members, please log in to download this worksheet.

Not a member? Please sign up to gain complete access.

www.mathworksheets4kids.com



Perimeter = _____

7) The side lengths of a triangle are 12 cm, 15 cm and 18 cm. Find its perimeter.

Perimeter = _____

8) Find the perimeter of the triangle, if the side lengths of the triangle are 17 yards, 17 yards and 33 yards.