

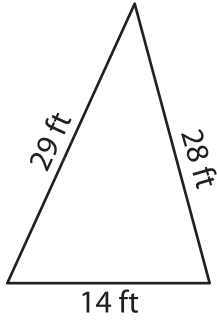
Name : _____

Perimeter of a Triangle

T2L2S2

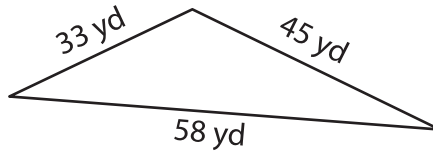
Find the perimeter of each triangle.

1)



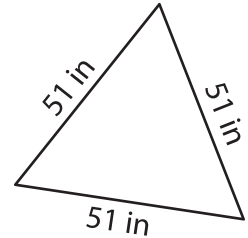
Perimeter = _____

2)

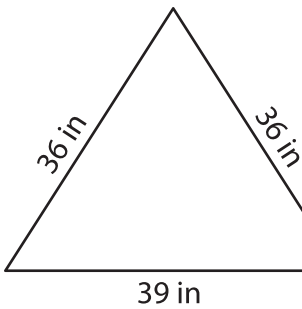


Perimeter = _____

3)



4)



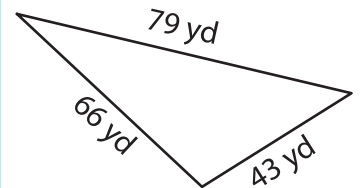
Perimeter = _____

PREVIEW
Gain complete access to the largest collection of worksheets in all subjects!

Members, please log in to download this worksheet.

Not a member? Please sign up to gain complete access.

www.mathworksheets4kids.com



Perimeter = _____

7) What is the perimeter of

s and 41 yards?

8) An isosceles triangle has two equal sides of length 34 inches each. If the length of the base is 30 inches, determine the perimeter of the isosceles triangle.