

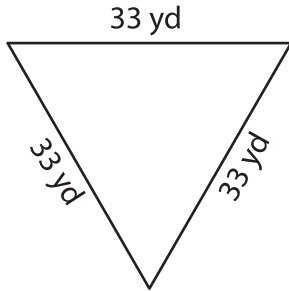
Name : _____

Perimeter of a Triangle

T2L2S3

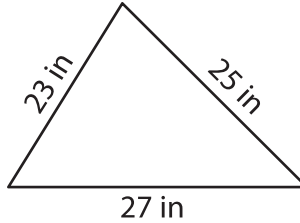
Find the perimeter of each triangle.

1)

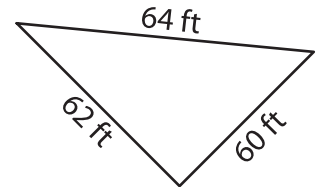


Perimeter = _____

2)

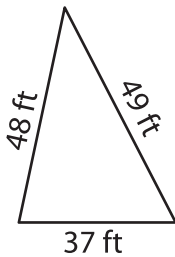


3)



Perimeter = _____

4)



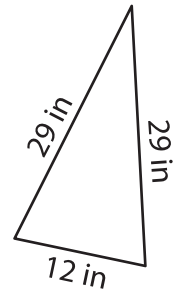
Perimeter = _____

PREVIEW
Gain complete access to the largest
collection of worksheets in all subjects!

Members, please
log in to
download this
worksheet.

Not a member?
Please sign up to
gain complete
access.

www.mathworksheets4kids.com



Perimeter = _____

7) The length of each of the
the base measures 34 in

What is the perimeter, if

8) Find the perimeter of an equilateral triangle whose side length is 42 feet.
