

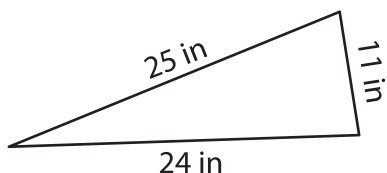
Name : \_\_\_\_\_

## Perimeter of a Triangle

T2L2S4

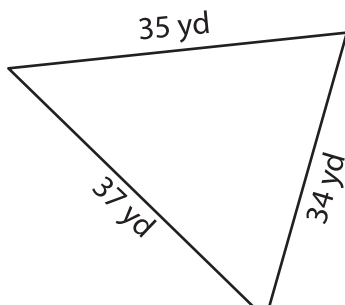
Find the perimeter of each triangle.

1)

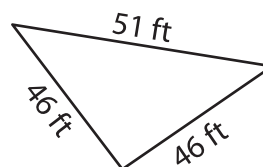


Perimeter = \_\_\_\_\_

2)

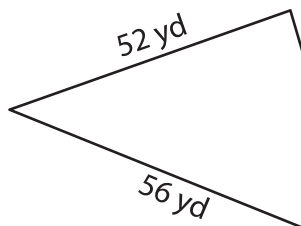


3)



Perimeter = \_\_\_\_\_

4)



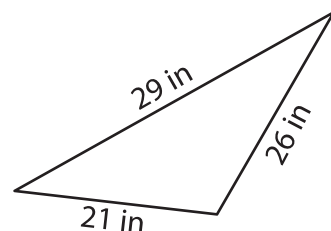
Perimeter = \_\_\_\_\_

**PREVIEW**  
Gain complete access to the largest collection of worksheets in all subjects!

Members, please log in to download this worksheet.

Not a member? Please sign up to gain complete access.

[www.mathworksheets4kids.com](http://www.mathworksheets4kids.com)



Perimeter = \_\_\_\_\_

7) Find the perimeter of the

60 feet.

8) What is the perimeter of the triangle, if the side lengths of the triangle are 42 inches, 40 inches and 36 inches?