

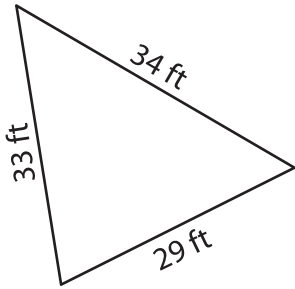
Name : _____

Perimeter of a Triangle

T2L2S5

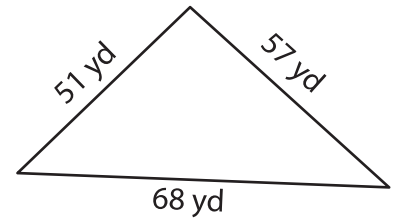
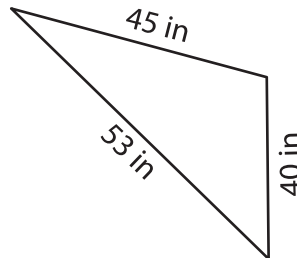
Find the perimeter of each triangle.

1)



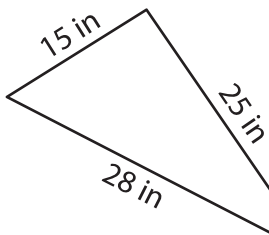
Perimeter = _____

2)



Perimeter = _____

4)



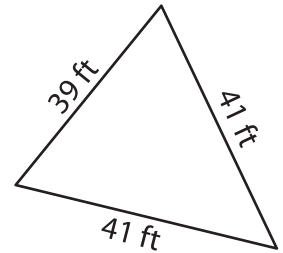
Perimeter = _____

PREVIEW
Gain complete access to the largest collection of worksheets in all subjects!

Members, please log in to download this worksheet.

Not a member? Please sign up to gain complete access.

www.mathworksheets4kids.com



Perimeter = _____

7) The side length of an equilateral triangle is 45 feet.

Determine its perimeter.

8) The side lengths of a triangle are 49 feet, 47 feet and 31 feet. Determine its perimeter.
