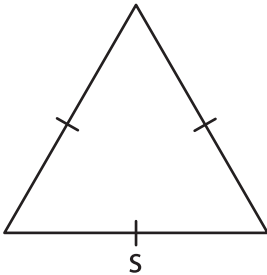


Missing Side

Find the missing side.

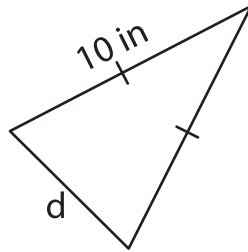
1)



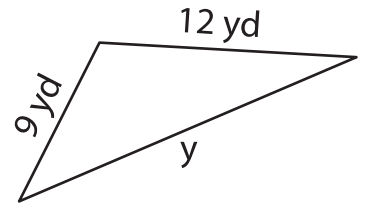
Perimeter = 33 ft

s = _____

2)



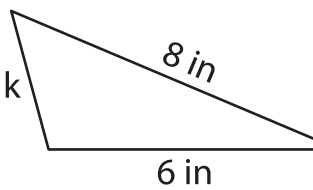
3)



Perimeter = 36 yd

y = _____

4)



Perimeter = 17 in

k = _____

7) The perimeter of a triangle is 14 yards and 17 yards, find the length of the missing side.

8) If the perimeter of an equilateral triangle is 24 feet, determine the length of each side.

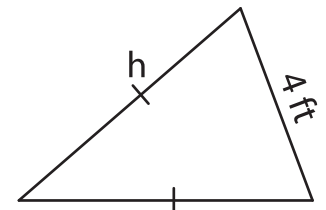
PREVIEW

Gain complete access to the largest collection of worksheets in all subjects!

Members, please log in to download this worksheet.

Not a member? Please sign up to gain complete access.

www.mathworksheets4kids.com



Perimeter = 16 ft

h = _____

are 14 yards and 17 yards,