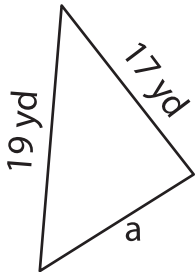


**Missing Side**

Find the missing side.

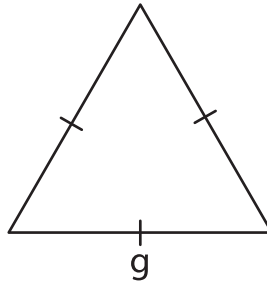
1)



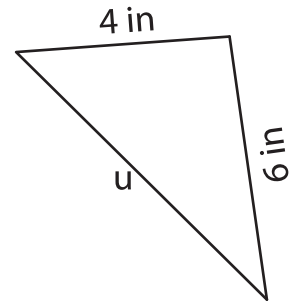
Perimeter = 52 yd

a = \_\_\_\_\_

2)



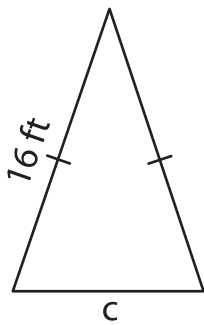
3)



Perimeter = 19 in

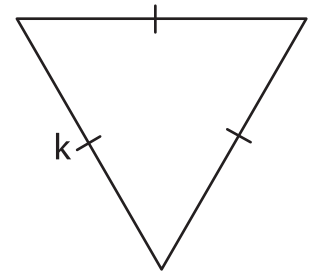
u = \_\_\_\_\_

4)



Perimeter = 42 ft

c = \_\_\_\_\_



Perimeter = 42 yd

k = \_\_\_\_\_

7) Each of the two equal sides of an equilateral triangle is 51 feet, what is the perimeter of the triangle?

\_\_\_\_\_

8) The perimeter of a triangle is 48 inches. If the lengths of two sides are 20 inches and 17 inches, find the length of the other side of the triangle.

\_\_\_\_\_

**PREVIEW**

Gain complete access to the largest collection of worksheets in all subjects!

Members, please log in to download this worksheet.

Not a member? Please sign up to gain complete access.

[www.mathworksheets4kids.com](http://www.mathworksheets4kids.com)