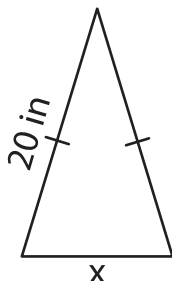


Missing Side

Find the missing side.

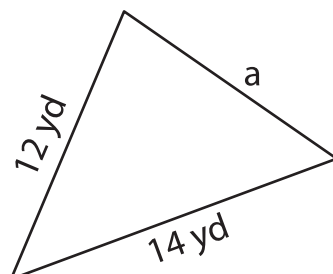
1)



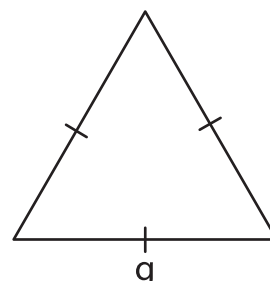
Perimeter = 54 in

x = _____

2)



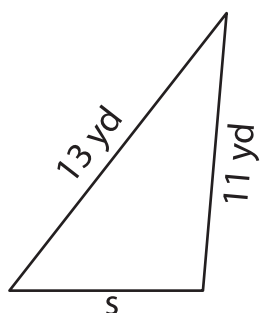
3)



Perimeter = 51 ft

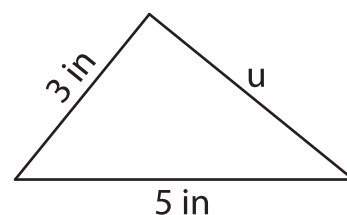
g = _____

4)



Perimeter = 31 yd

s = _____

PREVIEWGain complete access to the largest
collection of worksheets in all subjects!Members, please
log in to
download this
worksheet.Not a member?
Please sign up to
gain complete
access.www.mathworksheets4kids.com

Perimeter = 12 in

u = _____

7) If the perimeter of a triangle is 37 yards, and the two equal sides are 14 yards each, what is the length of the other side.

8) The perimeter of an isosceles triangle is 37 yards. If the two equal sides measure 14 yards each, what is the length of the other side?