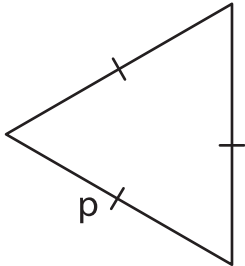


Missing Side

Find the missing side.

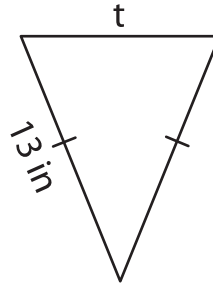
1)



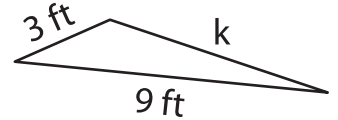
Perimeter = 66 yd

$p =$ _____

2)



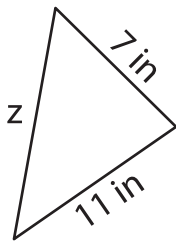
3)



Perimeter = 19 ft

$k =$ _____

4)



Perimeter = 33 in

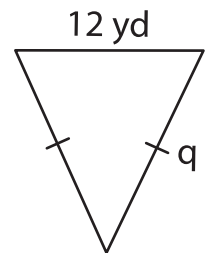
$z =$ _____

PREVIEW
Gain complete access to the largest collection of worksheets in all subjects!

Members, please log in to download this worksheet.

Not a member? Please sign up to gain complete access.

www.mathworksheets4kids.com



Perimeter = 40 yd

$q =$ _____

7) The perimeter of a triangle is 45 yards. Two sides are 22 yards and 17 yards, what is the length of the third side?

are 22 yards and 17 yards,

8) If the perimeter of an equilateral triangle is 30 inches, determine the length of each side.
