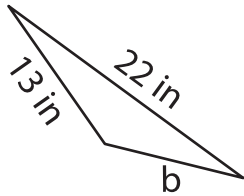


Missing Side

Find the missing side.

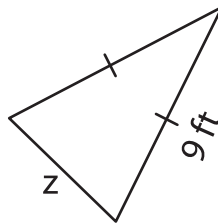
1)



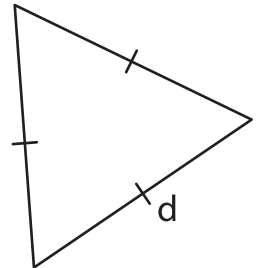
Perimeter = 45 in

b = _____

2)



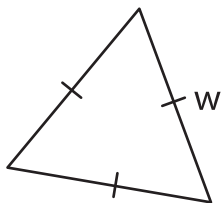
3)



Perimeter = 27 yd

d = _____

4)



Perimeter = 18 yd

w = _____

7) Each of the two equal sides of an equilateral triangle is 46 feet, determine the perimeter of the triangle.

8) The perimeter of a triangle is 43 yards. If the lengths of two sides are 11 yards and 19 yards, find the length of the other side of the triangle.

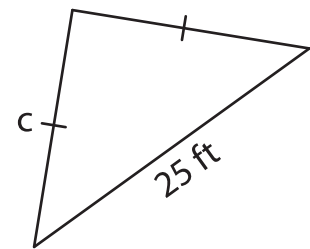
PREVIEW

Gain complete access to the largest collection of worksheets in all subjects!

Members, please log in to download this worksheet.

Not a member? Please sign up to gain complete access.

www.mathworksheets4kids.com



Perimeter = 57 ft

c = _____

_____ feet. If the perimeter of the