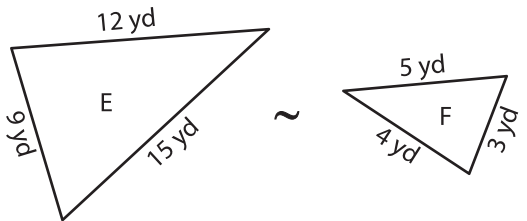


Scale Factor - Similar Triangles

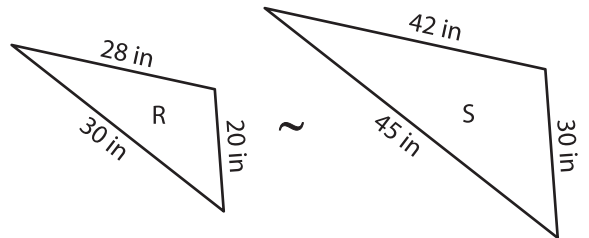
A) Find the scale factor of each pair of similar triangles.

1)



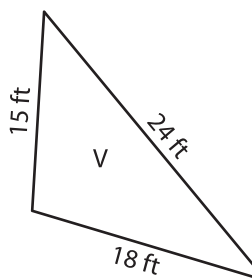
Scale factor of F to E is _____

2)



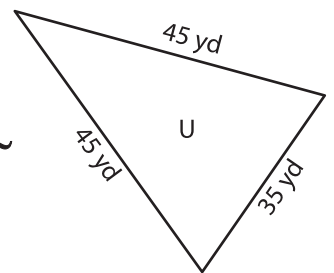
Scale factor of S to R is _____

3)



Scale factor of V to W _____

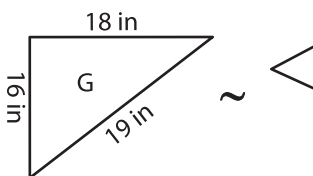
4)



Scale factor of U to B _____

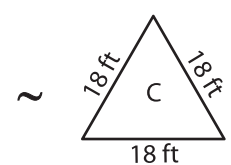
B) Find the scale factor of each pair of similar triangles.

5)



Scale factor of G to H _____

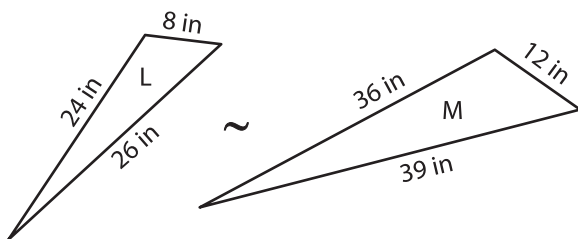
Scale factor of H to G _____



Scale factor of C to B _____

Scale factor of B to C _____

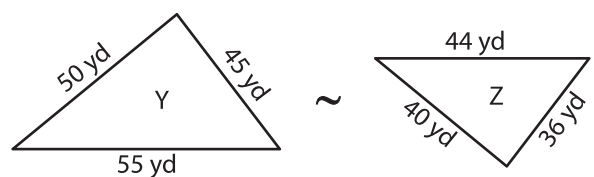
7)



Scale factor of L to M is _____

Scale factor of M to L is _____

8)



Scale factor of Y to Z is _____

Scale factor of Z to Y is _____

PREVIEW

Gain complete access to the largest collection of worksheets in all subjects!

Members, please log in to download this worksheet.

Not a member? Please sign up to gain complete access.

www.mathworksheets4kids.com