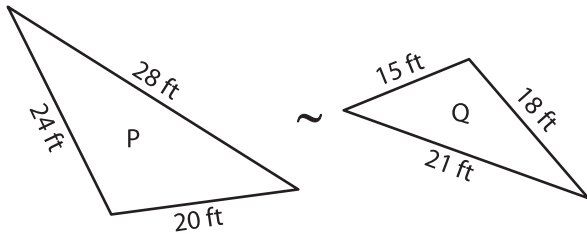


Scale Factor - Similar Triangles

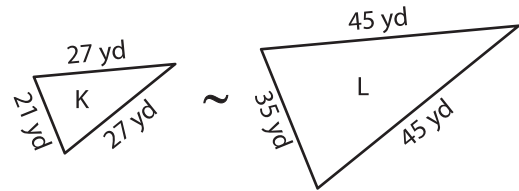
A) Find the scale factor of each pair of similar triangles.

1)



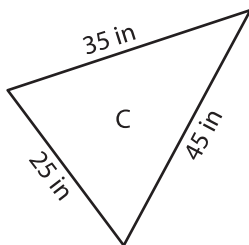
Scale factor of P to Q is _____

2)



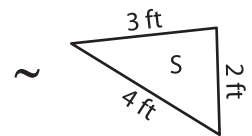
Scale factor of L to K is _____

3)



Scale factor of D to C _____

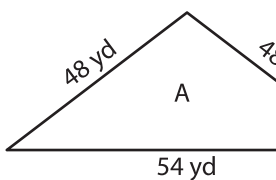
4)



Scale factor of S to L _____

B) Find the scale factor of each pair of similar triangles.

5)



Scale factor of A to B _____

Scale factor of B to A _____

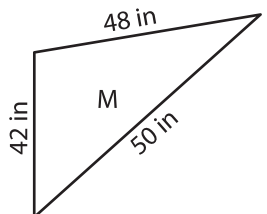
PREVIEW

Gain complete access to the largest collection of worksheets in all subjects!

Members, please log in to download this worksheet.

Not a member? Please sign up to gain complete access.

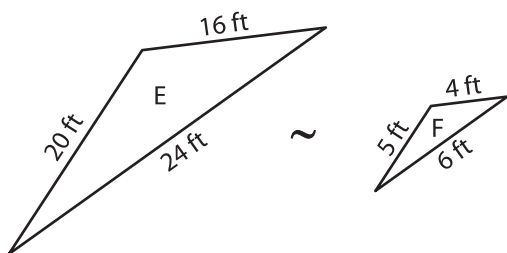
www.mathworksheets4kids.com



Scale factor of M to L _____

Scale factor of L to M _____

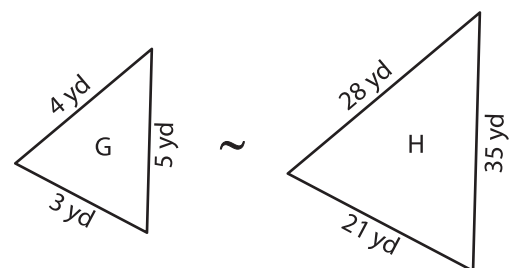
7)



Scale factor of E to F is _____

Scale factor of F to E is _____

8)



Scale factor of G to H is _____

Scale factor of H to G is _____