

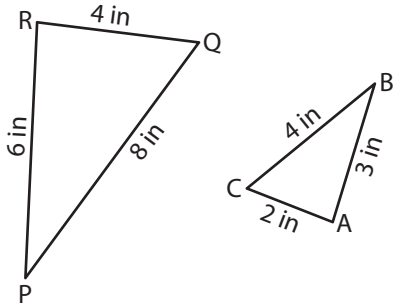
Name : \_\_\_\_\_

# Similarity Criteria

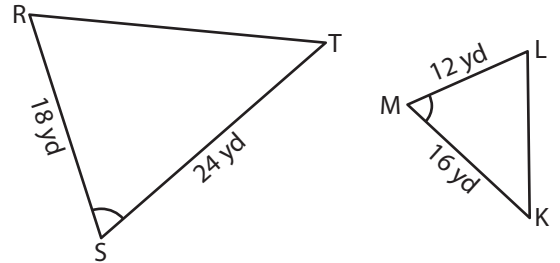
T1S1

Identify the similarity criterion and complete the similarity statement.

1)



2)

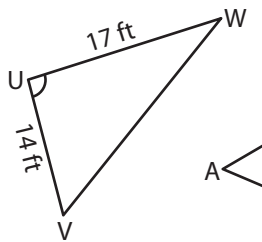


Similarity Criterion : \_\_\_\_\_

$\triangle ABC \sim$  \_\_\_\_\_

Similarity Criterion : \_\_\_\_\_

3)

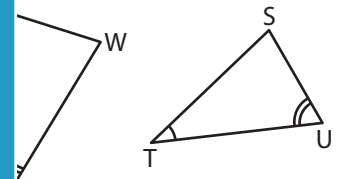


Gain complete access to the largest collection of worksheets in all subjects!

Members, please log in to download this worksheet.

Not a member? Please sign up to gain complete access.

[www.mathworksheets4kids.com](http://www.mathworksheets4kids.com)

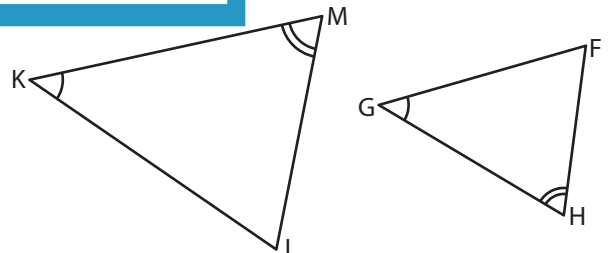
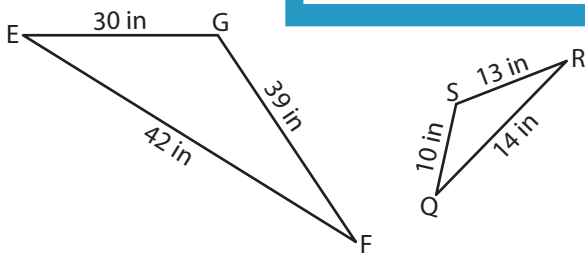


Similarity Criterion : \_\_\_\_\_

$\triangle UVW \sim$  \_\_\_\_\_

Similarity Criterion : \_\_\_\_\_

5)



Similarity Criterion : \_\_\_\_\_

$\triangle EFG \sim$  \_\_\_\_\_

Similarity Criterion : \_\_\_\_\_

$\triangle KLM \sim$  \_\_\_\_\_