

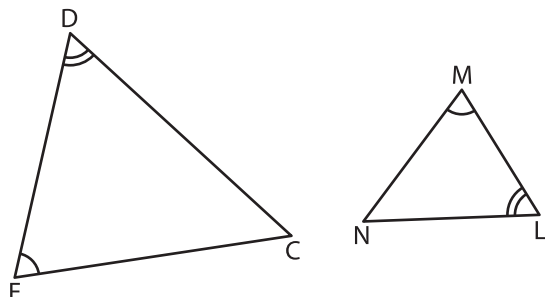
Name : _____

Similarity Criteria

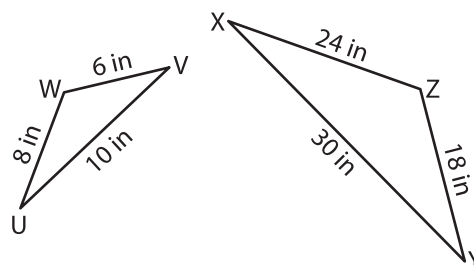
T1S3

Identify the similarity criterion and complete the similarity statement.

1)



2)

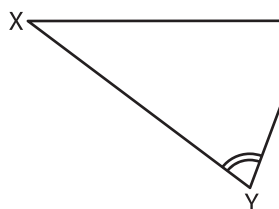


Similarity Criterion : _____

$\triangle LMN \sim$ _____

Similarity Criterion : _____

3)

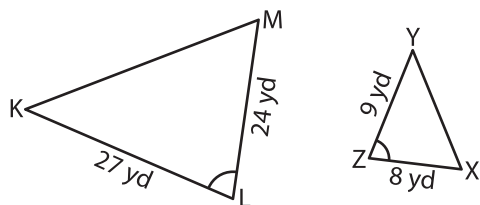


Similarity Criterion : _____

$\triangle XYZ \sim$ _____

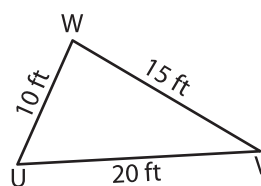
Similarity Criterion : _____

5)



Similarity Criterion : _____

$\triangle KLM \sim$ _____



Similarity Criterion : _____

$\triangle ABC \sim$ _____

PREVIEW

Gain complete access to the largest collection of worksheets in all subjects!

Members, please log in to download this worksheet.

Not a member? Please sign up to gain complete access.

www.mathworksheets4kids.com