

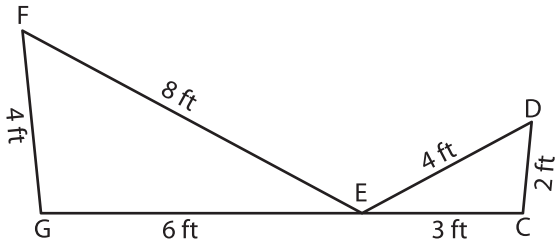
Name : _____

Similarity Criteria

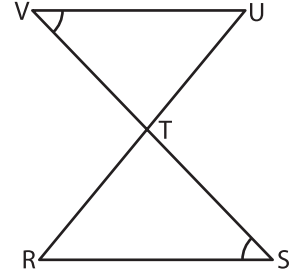
T2S2

Identify the similarity criterion and complete the similarity statement.

1)



2)



Similarity Criterion : _____

$\triangle CDE \sim$ _____

Similarity Criterion : _____

$\triangle VUT \sim$ _____

3)



Similarity Criterion : _____

$\triangle YZX \sim$ _____

Similarity Criterion : _____

$\triangle ZYV \sim$ _____

PREVIEW

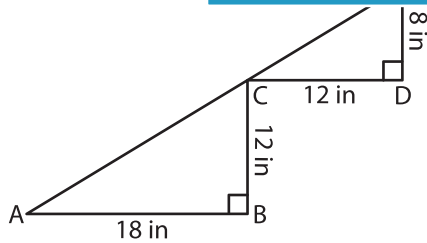
Gain complete access to the largest collection of worksheets in all subjects!

Members, please log in to download this worksheet.

Not a member? Please sign up to gain complete access.

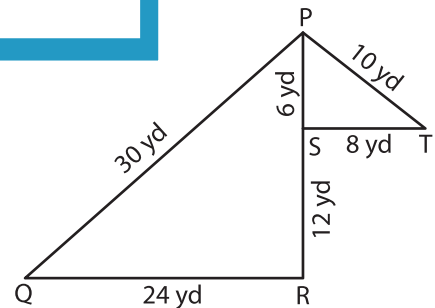
www.mathworksheets4kids.com

5)



Similarity Criterion : _____

$\triangle ABC \sim$ _____



Similarity Criterion : _____

$\triangle PQR \sim$ _____