

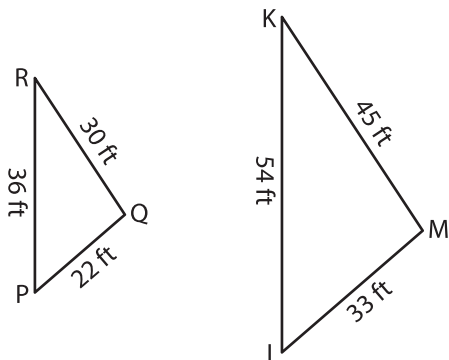
Name : _____

Similarity Statements

L1S2

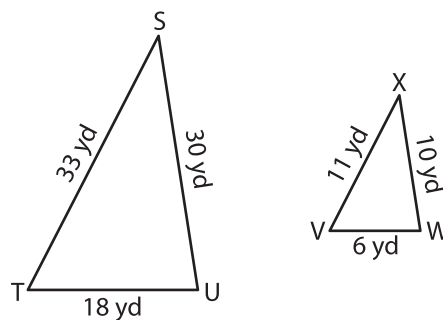
Complete each similarity statement.

1)



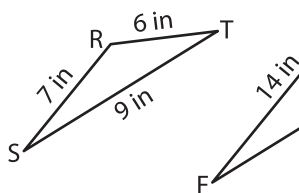
$\triangle PQR \sim$ _____

2)



$\triangle STU \sim$ _____

3)



$\triangle RST \sim$ _____

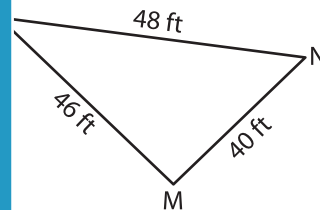
PREVIEW

Gain complete access to the largest collection of worksheets in all subjects!

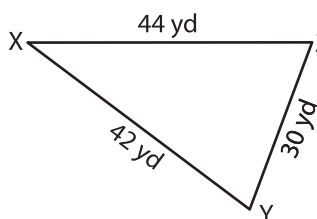
Members, please log in to download this worksheet.

Not a member? Please sign up to gain complete access.

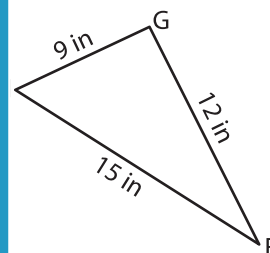
www.mathworksheets4kids.com



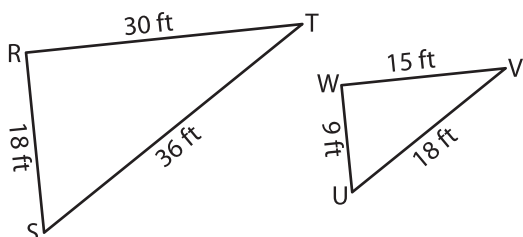
5)



$\triangle XYZ \sim$ _____

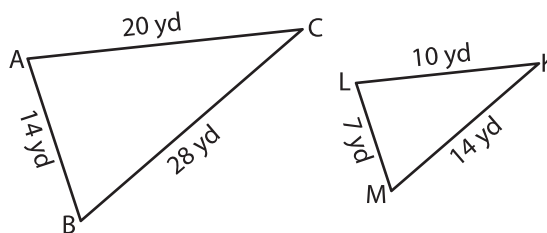


7)



$\triangle UUV \sim$ _____

8)



$\triangle ABC \sim$ _____