

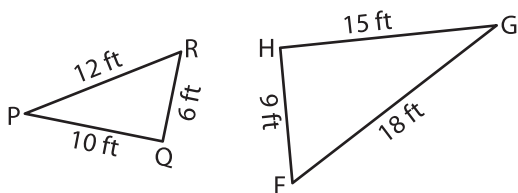
Name : _____

Similarity Statements

L2S2

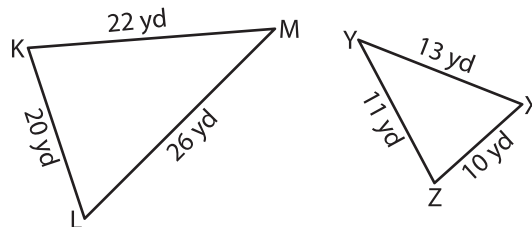
Complete each similarity statement.

1)



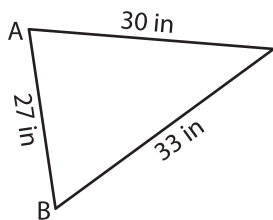
$\triangle PQR \sim$ _____

2)

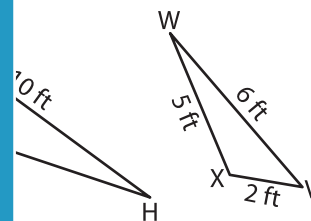


$\triangle XYZ \sim$ _____

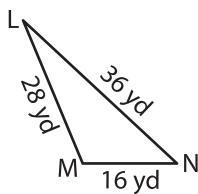
3)



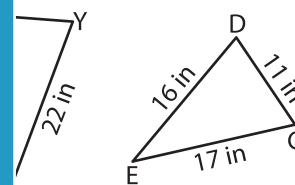
$\triangle ABC \sim$ _____



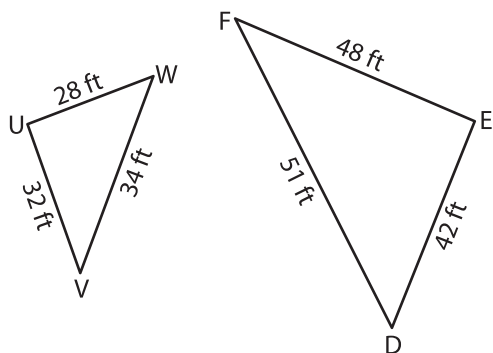
5)



$\triangle LMN \sim$ _____

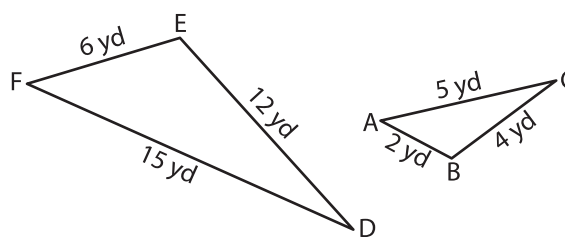


7)



$\triangle UVW \sim$ _____

8)



$\triangle FED \sim$ _____

PREVIEW

Gain complete access to the largest collection of worksheets in all subjects!

Members, please log in to download this worksheet.

Not a member? Please sign up to gain complete access.

www.mathworksheets4kids.com