

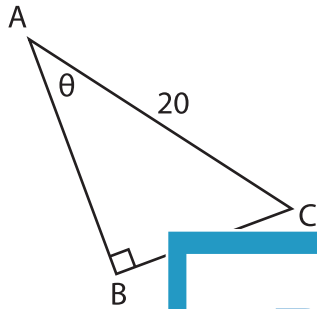
Name : \_\_\_\_\_

# Inverse Trigonometric Ratios

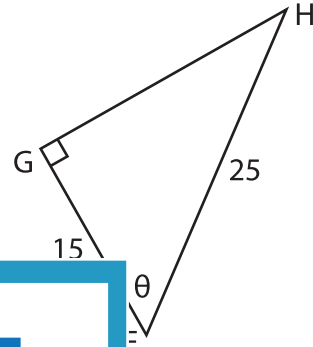
Sheet 1

Find the value of  $\theta$  in degrees. Round the answer to the nearest degree.

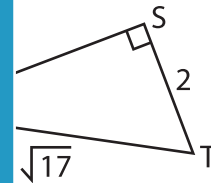
1)



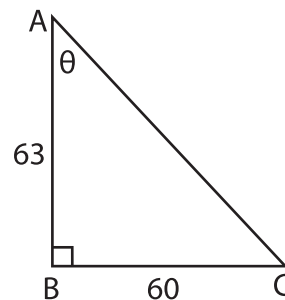
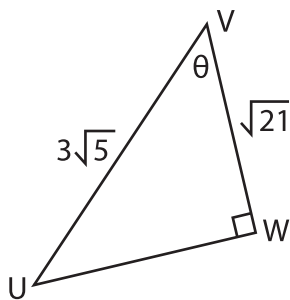
2)



3)



5)



# PREVIEW

Gain complete access to the largest collection of worksheets in all subjects!

Members, please log in to download this worksheet.

Not a member? Please sign up to gain complete access.

[www.mathworksheets4kids.com](http://www.mathworksheets4kids.com)