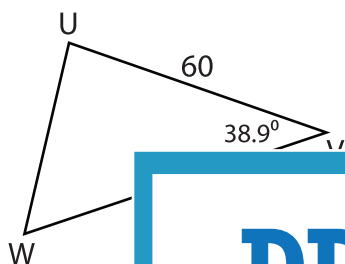


Missing Sides

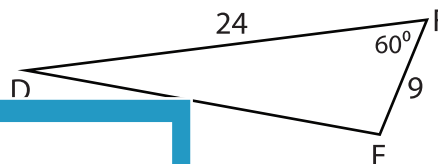
Find the measure of each indicated side. Round your answer to the nearest tenth.

1)

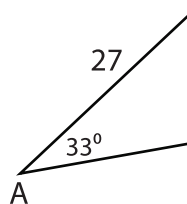


UW = _____

2)



3)

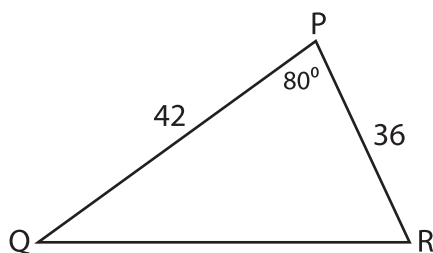


AC = _____

19

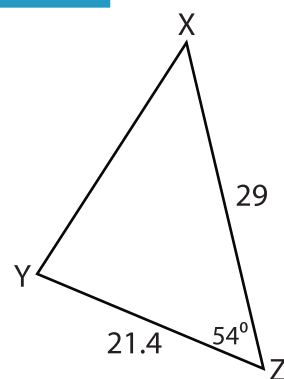
 71°

5)



QR = _____

6)



XY = _____

PREVIEW

Gain complete access to the largest
collection of worksheets in all subjects!

Members, please
log in to
download this
worksheet.

Not a member?
Please sign up to
gain complete
access.

www.mathworksheets4kids.com