

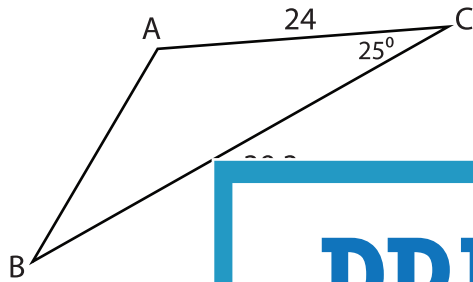
Name : _____

Missing Sides and Angles

Sheet 1

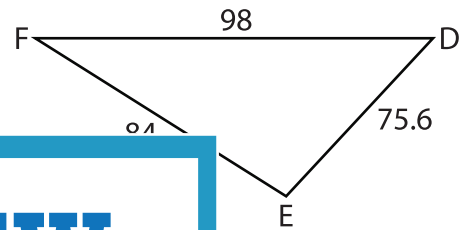
Find the measure of each indicated side or angle. Round your answer to the nearest tenth.

1)

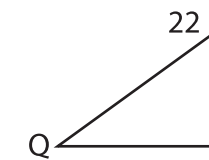


AB = _____

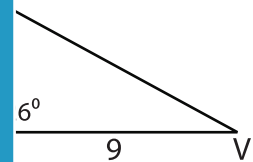
2)



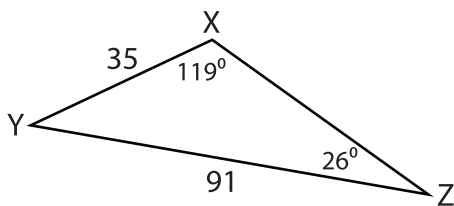
3)



$m\angle Q =$ _____

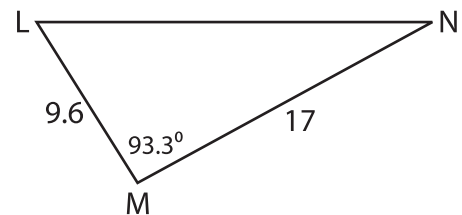


5)



XZ = _____

6)



$m\angle N =$ _____

PREVIEW

Gain complete access to the largest collection of worksheets in all subjects!

Members, please log in to download this worksheet.

Not a member? Please sign up to gain complete access.

www.mathworksheets4kids.com