

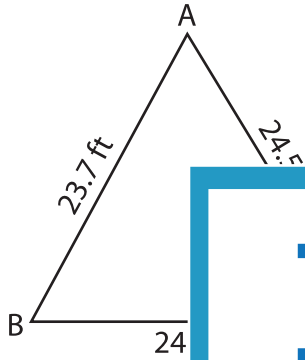
Name : _____

T1S1

Solving Triangles

Solve each triangle from the given measurements. Round your answer to the nearest tenth.

1)

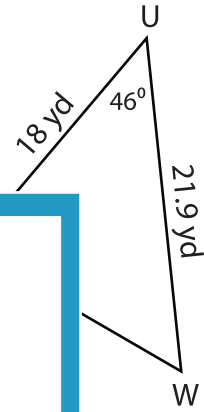


$m\angle A =$ _____

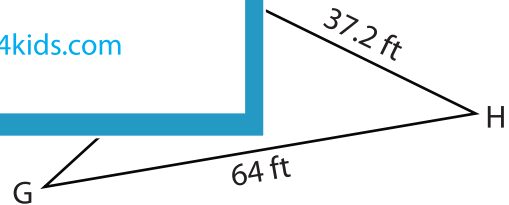
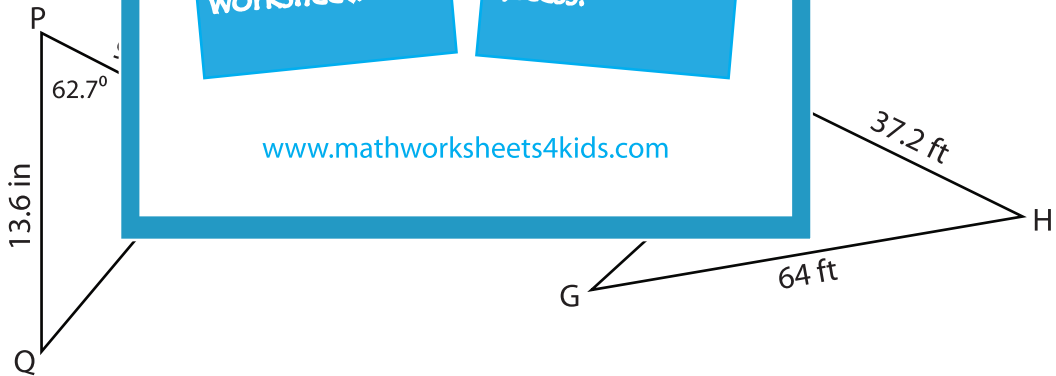
$m\angle B =$ _____

$m\angle C =$ _____

2)



3)



$m\angle Q =$ _____

$m\angle R =$ _____

$p =$ _____

$m\angle F =$ _____

$m\angle G =$ _____

$m\angle H =$ _____

PREVIEW

Gain complete access to the largest collection of worksheets in all subjects!

Members, please log in to download this worksheet.

Not a member? Please sign up to gain complete access.

www.mathworksheets4kids.com