

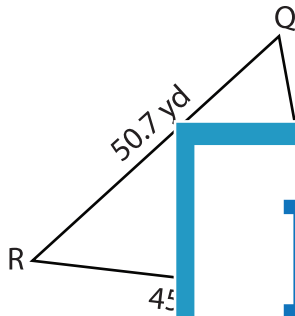
Name : _____

Solving Triangles

T1S3

Solve each triangle from the given measurements. Round your answer to the nearest tenth.

1)

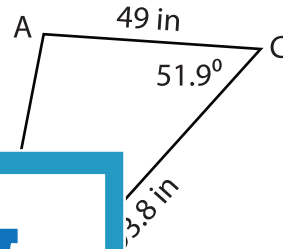


$m\angle Q =$ _____

$m\angle R =$ _____

$m\angle S =$ _____

2)



PREVIEW

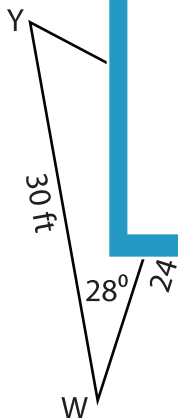
Gain complete access to the largest collection of worksheets in all subjects!

Members, please log in to download this worksheet.

Not a member? Please sign up to gain complete access.

www.mathworksheets4kids.com

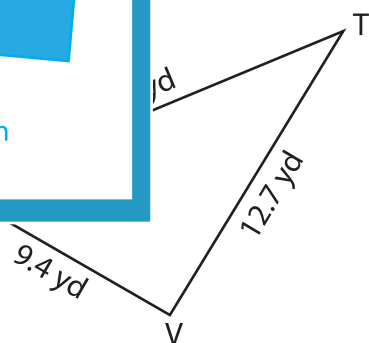
3)



$m\angle X =$ _____

$m\angle Y =$ _____

$w =$ _____



$m\angle T =$ _____

$m\angle U =$ _____

$m\angle V =$ _____